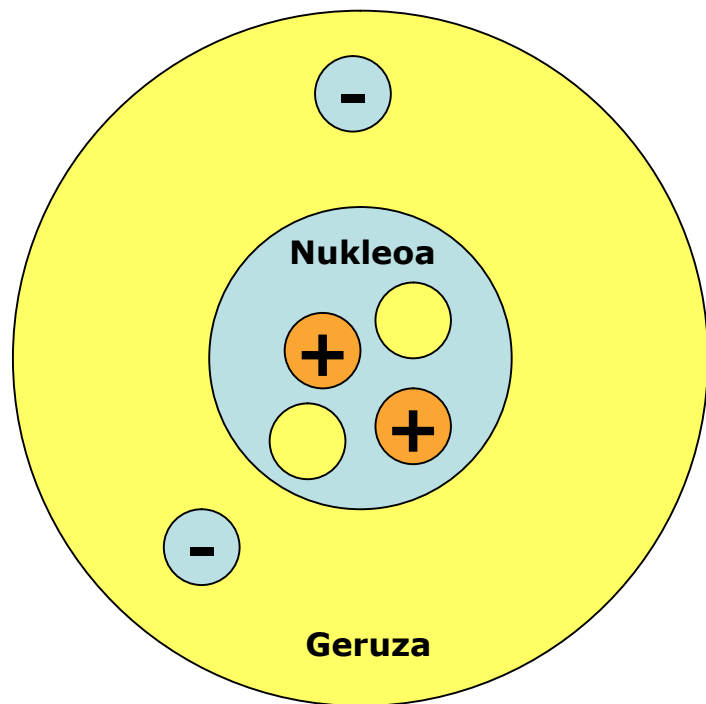


Rutherford-en eredu atomikoa: eskema

Rafa Muñoa
Lizardi Institutua
Zarautz

Teoria



Partikulak	Karga	Masa	
Protoia		1	} nukleoa
Neutroia		1	
Elektroia		1/2000	geruza

Zerk ematen dio atomoari bere nortasuna (izena)? ... **protoi-kopuruak**

Protoi bakarra duen atomoa hidrogenoa (H) da, bi protoi dituenak helio (He), hiru dituenak litio (Li)...

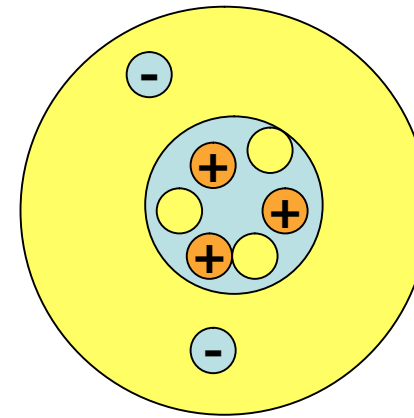
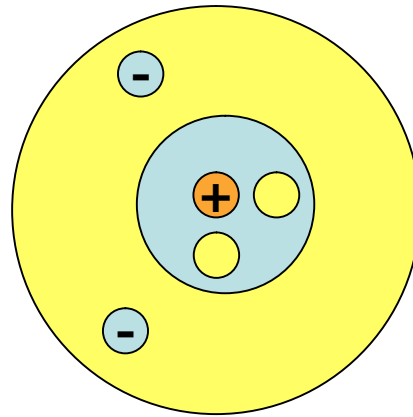
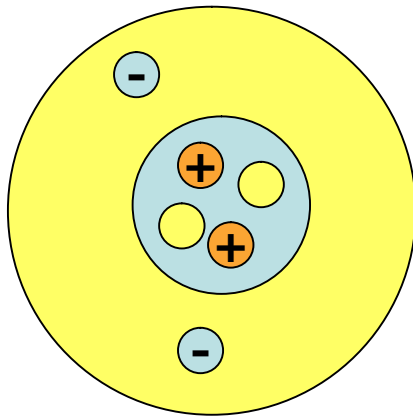
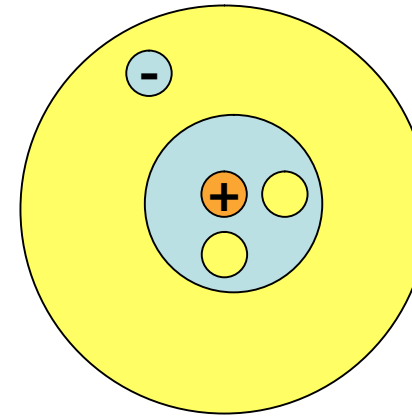
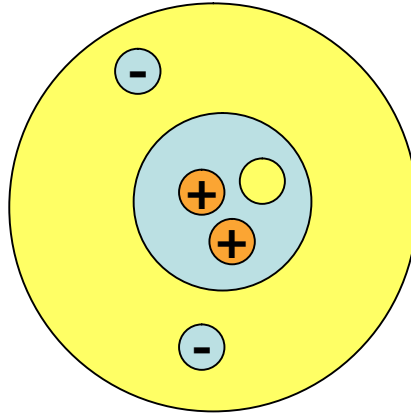
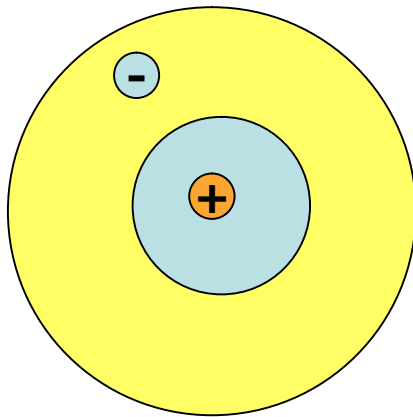
1																	2
H																	He
3	4											5	6	7	8	9	10
Li	Be											B	C	N	O	F	Ne
11	12											13	14	15	16	17	18
Na	Mg											Al	Si	P	S	Cl	Ar
19	20	21	22	23	24	25	26	27	28	29	30	31	32	33	34	35	36
K	Ca	Sc	Ti	V	Cr	Mn	Fe	Co	Ni	Cu	Zn	Ga	Ge	As	Se	Br	Kr

Rutherford-en eredu atomikoa: eskema

Rafa Muñoa
Lizardi Institutua
Zarautz

Ariketa-eredua

Deskribatu ondoko atomo/ioiak

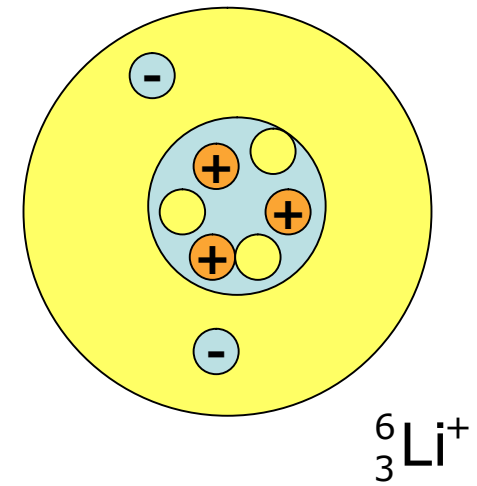
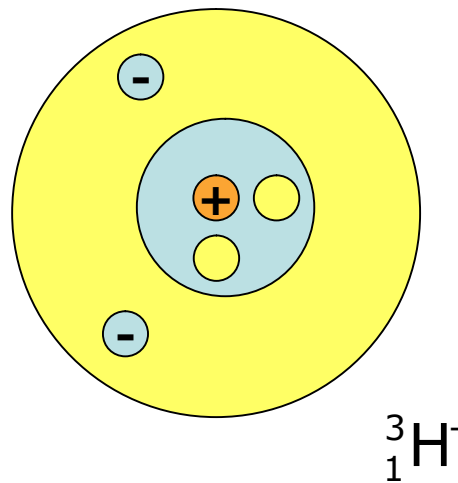
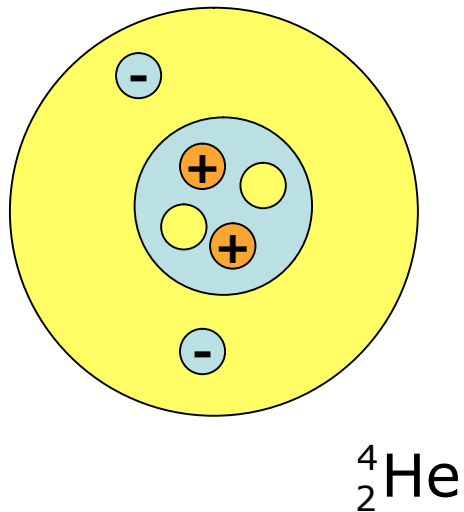
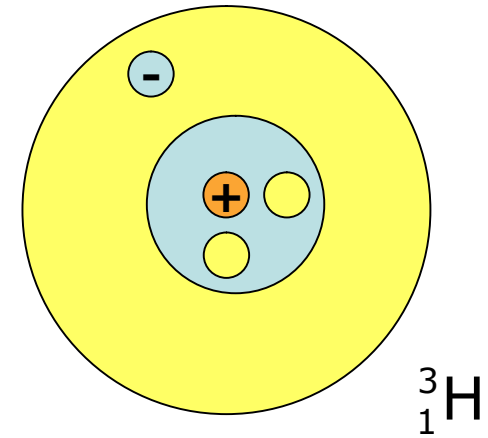
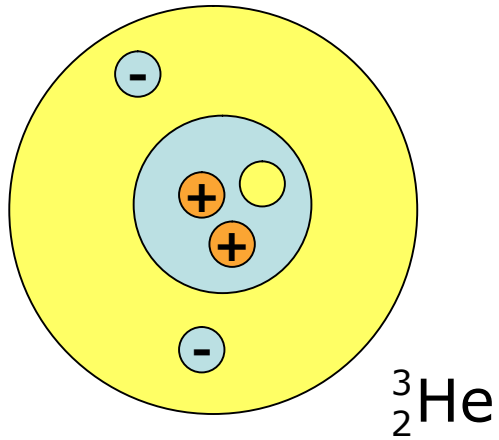
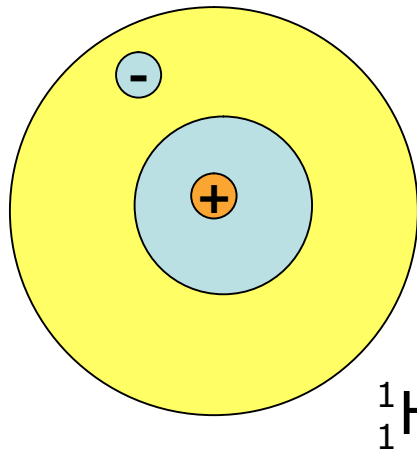


Rutherford-en eredu atomikoa: eskema

Rafa Muñoa
Lizardi Institutua
Zarautz

Ariketa-eredua: ebazpena

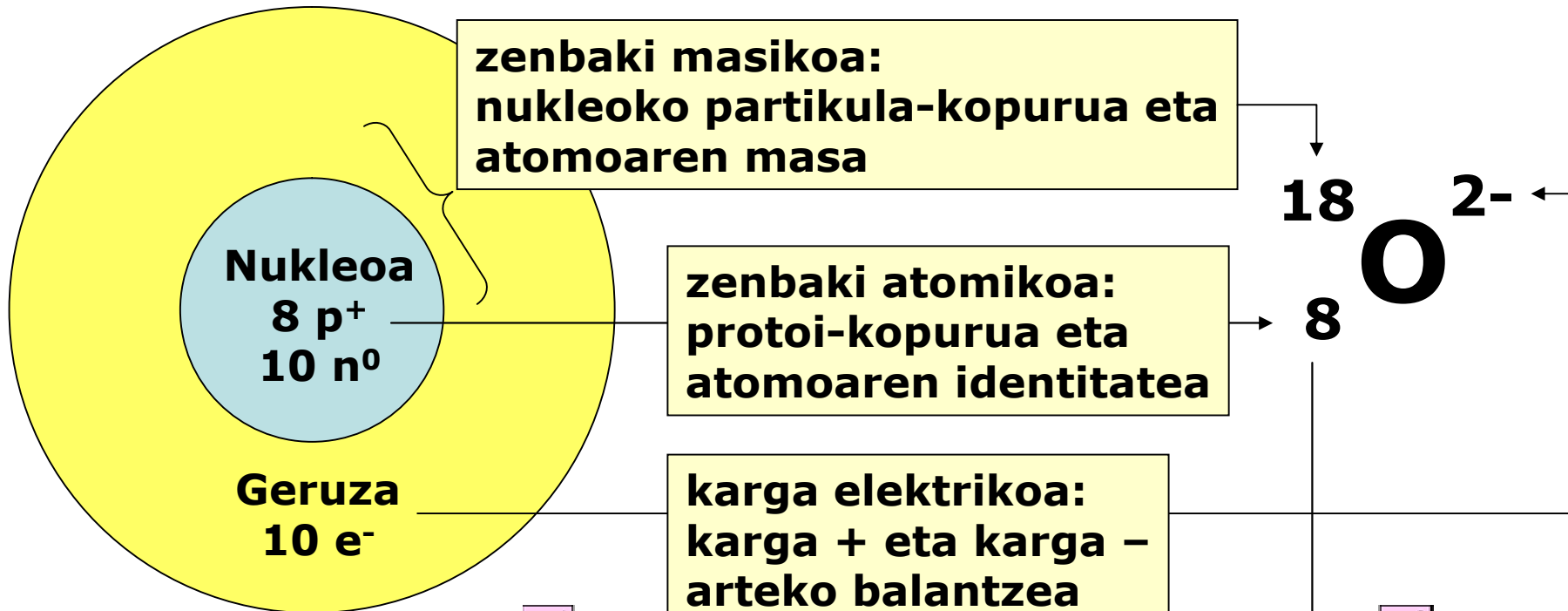
Deskribatu ondoko atomo/ioiak



Rutherford-en eredu atomikoa: eskema

Rafa Muñoa
Lizardi Institutua
Zarautz

Zenbaki atomikoa, masikoa eta karga



1																	2
H																	He
3	4											5	6	7	8	9	10
Li	Be											B	C	N	O	F	Ne
11	12											13	14	15	16	17	18
Na	Mg											Al	Si	P	S	Cl	Ar
19	20	21	22	23	24	25	26	27	28	29	30	31	32	33	34	35	36
K	Ca	Sc	Ti	V	Cr	Mn	Fe	Co	Ni	Cu	Zn	Ga	Ge	As	Se	Br	Kr
37	38	39	40	41	42	43	44	45	46	47	48	49	50	51	52	53	54
Rb	Sr	Y	Zr	Nb	Mo	Tc	Ru	Rh	Pd	Ag	Cd	In	Sn	Sb	Te	I	Xe
55	56	57	72	73	74	75	76	77	78	79	80	81	82	83	84	85	86

Rutherford-en eredu atomikoa: eskema

Rafa Muñoa
Lizardi Institutua
Zarautz

Ariketak

Deskribatu ondoko atomo/ioiak

